




My number is




written in words is

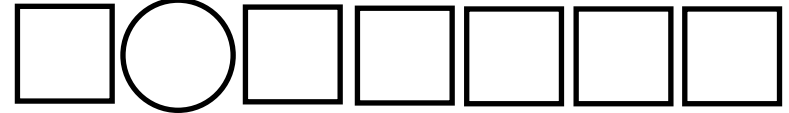
Complete the sequence in steps of 1



Complete the sequence in steps of 2



Complete the sequence in steps of 10



1 more than is

10 more than is

Double is

Half is

Circle the coins to make p



Put a ✓ or ✗ for

Odd

Even

More than 20

In the 3 times table

Between 20 and 40

In the 5 times table

$$\text{○} + 4 =$$

$$\text{○} + 9 =$$

$$7 + \text{○} =$$

$$\text{○} + \text{○} =$$

$$\text{○} - 3 =$$

$$\text{○} - 4 =$$

$$20 + \text{○} =$$

$$100 - \text{○} =$$

$$\text{○} + 5 =$$

So I also know that

$$5 + \text{○} =$$

$$- \text{○} =$$

$$- = \text{○}$$

Circle the shapes to make

